



POLE STAR PUBLIC SCHOOL

Sector-7 (Extn.) Gurugram (HR.)

WINTER HOLIDAY'S HOMEWORK SESSION: 2024-2025 CLASS – I



Winter vacation is a time to relax and celebrate the time in the company of your family, friends and celebrate New Year with your family. During the winter season, everyone enjoys sweets, cakes, and delicious dishes made by your mother.

Please take note of the following suggestions:

- Encourage your child to converse in English.
- Encourage your child to watch informative program on television.
- Help them revise all the concepts done so far.
- Parents are requested to only guide their children while doing their Sample Papers.

BOOK NAME- THE BEGINNER'S JOY QUOTIENT

ENGLISH	:	Page No. 9 to17, 19 to 34
हिंदी	:	Page No. 129 to 130, 133 to 136,138, 139,141,143 to 152
Maths	:	Page No. 50 to 53, 56, 57, 62 to 77
E.V.S	:	Page No. 80, 81, 84 to 99
G.K	:	Page No.105 to 109
DRAWING	:	Vase air blowing technique, pencil shaving flowers (collage), Page no. 27,39

General Instructions:

- Read the question paper carefully.
- Write neatly and legibly.
- Do not overwrite. Pay special attention to spellings.
- Read the answer before submitting the answer paper.

1. Read the passage and answer the following questions (6)

My House

My family lives in a house.
Our house is very nice.
It has two bedrooms.
We cook and eat in the kitchen. We watch TV in the living room. My favorite room is my bedroom. I like to read books and do my homework in my bedroom.



1. My family lives in _____.
2. Our house has two _____.
3. We cook and eat in the _____.
4. We watch TV in the _____.
5. My favorite room is _____.
6. I like to _____ and _____
in my bedroom.

2. Word meaning. (2)

a) Potter - _____

b) Prepare - _____

3. Make sentences

(2)

- a) Swing _____
- b) Scared _____

4. Fill in the blanks with has or have.

(5)

- a) He _____ blue pen.
- b) I _____ a yellow cap.
- c) They _____ many friends.
- d) Sana _____ a new bicycle .
- e) We _____ a small house.

5. Fill suitable doing words from the bracket in the given sentences.

(2)

[runs, go, wags, loves]

- a) I _____ to school every morning.
- b) Cheetah _____ fast.
- c) The dog _____ its tail.
- d) She _____ eat chocolates.

6. Fill in the blanks with correct position words from the brackets.

(3)

- a) The notebook is _____ the table. (in,at)
- b) The pencil is _____ the box. (on ,in)
- c) The library opens _____ 6 0' clock . (at,on)

7. Write the opposites.

(4)

- a) Young- _____ .
- b) First - _____ .
- c) Light - _____ .
- d) Wet - _____ .

8. Answer these questions in complete sentences.

(5)

- a) What is your name?
- _____

b) Where do you live?

c) What are your hobbies?

d) Do you like to read books?

e) What do you like to eat?

9. Complete the following sentences.

(3)

a) Father and Tara _____

b) Giggles love to eat _____

c) Mummy has to _____ the jar.

10. Write two rhyming words of each.

(3)

a) Cry

b) Dear

c) Pot

11. Tick [✓] the correct answer.

(2)

a) Miss fly, at first, shared her home with _____

(i) Mr.frog

(ii) Mr.Mouse

b) Whose birthday is it?

(i) Father's

(ii) Granny's

c) Mummy take Giggles to the_____

(i) Barber

(ii) Dentist

d) What does the child see when the swing comes down ?

(i) House

(ii) Roof

12 Answer the following questions

(3)

a) Who was Gopi?

b) How does Tara help her mother?

c) Why did Giggles cry?

पोल स्टार पब्लिक स्कूल

सेक्टर-7 (एक्सटेंशन) गुरुग्राम

अधिन्यास परीक्षा (2024-2025)

कक्षा - पहली

कुल अंक - 40

विषय - हिंदी

समय : 2 घंटा

सामान्य निर्देश :-

- सभी प्रश्नों के उत्तर देना अनिवार्य है।
- लेख सुंदर व स्पष्ट हो।

अपठित गद्यांश

1. गद्यांश पढ़कर प्रश्नों के उत्तर लिखो।

(5)

राजा और लता बाजार गए। राजा बाजा लाया उसका बाजा लाल था। लता माला लाई है गाजर और टमाटर लाई। राघव कल बाजार जाएगा वह छाता जाएगा और अपने लिए ढेर सारे खिलौने जाएगा।

क) बाजार कौन-कौन गया ?

ख) राजा का बाजा कैसा था ?

ग) लता क्या लाई ?

घ) टमाटर और गाजर कौन लाया ?

ड) कौन बाजार जाएगा ?

2. चित्र देखकर अक्षर लिखो।

(5)





3. वाक्य रचना।

(4)

क) चालाक

ख) ड्रामा

ग) खुश

घ) शिक्षा

4. रिक्त स्थान भरो।

(4)

क) _____ में सर्कस का सामान आया है ।

ख) मामी पत्थर की _____ लाई।

ग) बिल्ली _____ के नीचे बैठी है।

घ) बंदर _____ पर बैठा है ।

5. रिक्त स्थान भरो।

(5)

- क) वर्ष में ___ महीने होते हैं ।
ख) वर्ष का पहला महीना ___ होता है ।
ग) अगस्त के बाद ___ महीना आता है ।
घ) ___ भाई बहन का त्यौहार है।
ड) ___ रंगों का त्यौहार है।

6. चित्र पहचान कर सहायक का नाम लिखो ।

(4)



हमारे पत्र लाता है ।



हमारा इलाज करता है।



हमारे लिए अनाज उगाता है



हमारे कपड़े सिलता है।

7. एक से 10 तक गिनती लिखो ।

(5)

_____ _____ _____ _____ _____
_____ _____ _____ _____ _____

8. विलोम शब्द लिखो ।

(3)

क) कच्चा _____

ख) मोटा _____

ग) हल्का _____

9. प्रश्नों के उत्तर दो ।

(5)

क) गुब्बारे कैसे थे ?

ख) मैं कल क्या देखने गया ?

ग) कौन से संकट पर ड्रामे का नाम था ?

घ) गुड्डी बाजार से क्या लेकर आई ?

ड) अक्षय क्या बनना चाहता है ?

POLE STAR PUBLIC SCHOOL
SECTOR-7 EXTN.GURUGRAM, HARYANA
SAMPLE PAPER (2024-2025)

Class- I
M.M- 40

Subject- Maths
Time- 2 Hours

General Instructions:

- Read the question paper carefully.
- Write neatly and legibly.
- Do not overwrite. Pay special attention to spellings.
- Read the answer before submitting the answer paper.

1. Dodging tables.

(3)

- | | |
|-------------------------|-------------------------|
| a) $2 \times 7 =$ _____ | d) $9 \times 3 =$ _____ |
| b) $6 \times 9 =$ _____ | e) $3 \times 4 =$ _____ |
| c) $5 \times 8 =$ _____ | f) $4 \times 4 =$ _____ |

2. Fill in the blanks.

(5)

- a) A triangle has _____ sides.
- b) $3 \times \underline{\quad} = 21$
- c) $5 + 5 + 5 =$ _____ times 5.
- d) October has _____ days.
- e) Short hand of a clock is _____ hand.

3. Identify the factors and products.

(3)

- | | Factors | Product |
|----------------------|---------|---------|
| a) $5 \times 7 = 35$ | _____ | _____ |
| b) $3 \times 8 = 24$ | _____ | _____ |

4. Name the shapes.

(3)











5. Complete the pattern.

(3)

a) 10,20,30,40, _____, _____.

b)     _____, _____.

c) 4,8,12,16, _____, _____.

6. Solve the sums.

(3)

a) T O

8 1

+ 2 2

b) T O

6 4

+ 4 4

c) T O

7 4

+ 3 2

7. Find the difference.

(3)

a) T O

7 8

- 1 7

b) T O

9 9

- 3 0

c) T O

6 7

- 1 3

8. Fill in the blanks.

(3)

a) 4

x 6

b) 7

x 7

c) 8

x 4

9. Write the time shown on the clock.

(3)


a)



b)



c)



10. Show the time.

(3)

a)



11:00

b)



6:00

c)



2:00

11. Match the following.

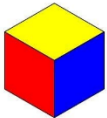
(2)

a)



Sphere

b)



Cone

c)



Cuboid

3. Fill in the blanks.

(3)

(fruits, Tonga, stars, Gurupurab's, rain, clock)

- a) The _____ twinkle in the sky at night.
- b) The _____ tells us the time.
- c) _____ is used in the village for travelling.
- d) The _____ of the plants have seeds.
- e) _____ are celebrated on the birthday of ten Sikh Gurus.
- f) We get water from _____.

4. Match the following.

(5)

A

B

a) Dolphin

Train

b) Santas Claus

Herbs

c) Rose

Round

d) Earth

Water animal

e) Land transport

Christmas

5. Name the following in one word.

(3)

- a) A bird that cannot fly - _____
- b) The vehicle runs on track - _____
- c) The last month of the year - _____

6. Write missing words.

(4)

a) S _ _ P TE _ _ BER

c) H _ _ ND _ _ UMP

b) SA _ _ URD _ _ Y

d) DR _ _ NK _ _ NG

7. Circle the odd one out.

(2)

- a) Scooter, Bus, Helicopter, Bicycle
- b) January, March, Friday, November
- c) Sun, Moon, Globe, Stars
- d) Well, Tap, Pond, Mountain

8. Rewrite the unscrambled words.

(4)

a) A R P I L

b) P T O T O

c) A W R T E

d) R E G T I

9. Put the correct words in blanks.

(6)

[Aero plane ,Car, Helicopter, Ship , Motor cycle, Boat]

Land transport

Water transport

Air transport

10. Name any two things you can see in the

(4)

a) Sky; _____, _____

b) Earth; _____, _____

11. Answer the following questions.

(3)

a) How many months are there in a year?

b) Name the vehicles that we can use to go near by places?

c) What are water animals?
